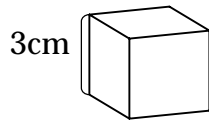
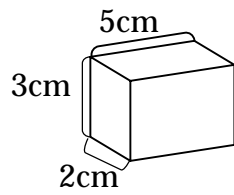


1. 次の図形の表面積と体積を求めよ

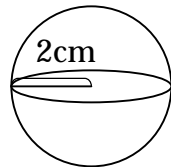
(1) 立方体



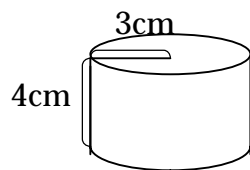
(2) 直方体



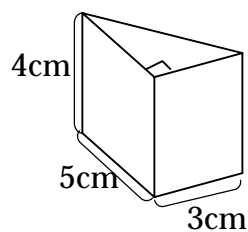
(3) 球



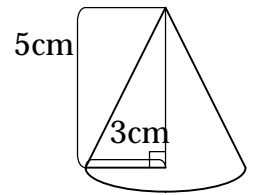
(4) 円柱



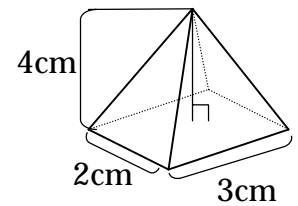
(5) 三角柱



(6) 円錐



(7) 四角錐



(8) 三角錐

